

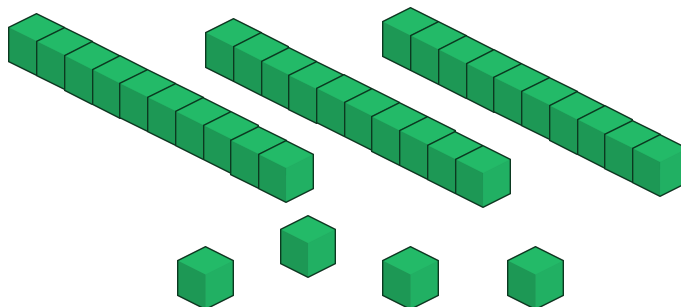
Rozdiel/odčítanie

$34 - 18 = ?$

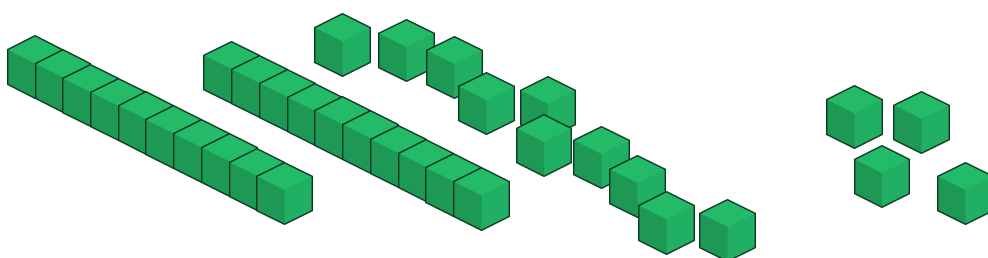
Urob 34.

Odober 16 kociek.

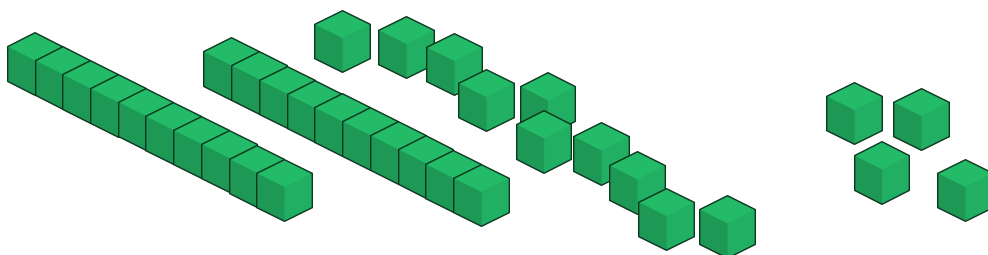
Nedá sa!



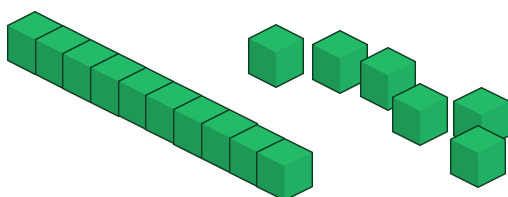
Zmeň jednu desiatku na jednotky.



Teraz odober 18.



Ostane ti 16.



$34 - 18 = 16$

Pomocou desaťkocky vypočítaj nasledujúce:

- | | | | | |
|--------------|--------------|--------------|----------------|---------------|
| 1) $27 - 19$ | 2) $24 - 17$ | 3) $74 - 47$ | 4) $92 - 75$ | 5) $143 - 56$ |
| 6) $36 - 18$ | 7) $46 - 27$ | 8) $63 - 36$ | 9) $112 - 108$ | |