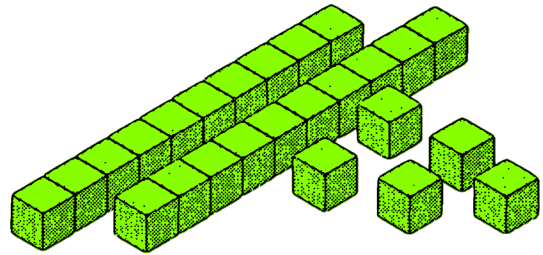


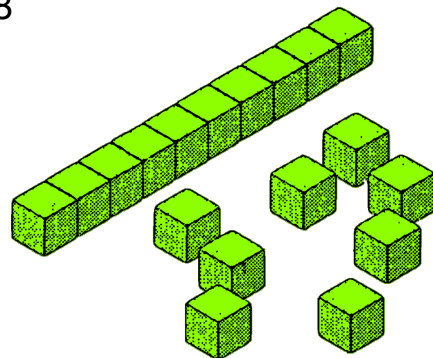
Sčítanie tvarov

$$\begin{array}{r} 25 \\ + 18 \\ \hline 43 \end{array}$$


Urob 25



Urob 18



Koľko spolu?



Do zošita dokonči nasledujúce výpočty.
Použi desatkocku.

1)
$$\begin{array}{r} 23 \\ + 29 \\ \hline \square\square \end{array}$$

2)
$$\begin{array}{r} 46 \\ + 25 \\ \hline \square\square \end{array}$$

3)
$$\begin{array}{r} 37 \\ + 48 \\ \hline \square\square \end{array}$$

4)
$$\begin{array}{r} 61 \\ + 9 \\ \hline \square\square \end{array}$$

5)
$$\begin{array}{r} 7 \\ + 23 \\ \hline \square\square \end{array}$$

6)
$$\begin{array}{r} 37 \\ + 23 \\ \hline \square\square \end{array}$$

7)
$$\begin{array}{r} 46 \\ + 64 \\ \hline \square\square\square \end{array}$$

8)
$$\begin{array}{r} 35 \\ + 82 \\ \hline \square\square\square \end{array}$$

9)
$$\begin{array}{r} 27 \\ + 33 \\ \hline \square\square \end{array}$$

10)
$$\begin{array}{r} 76 \\ + 87 \\ \hline \square\square\square \end{array}$$