


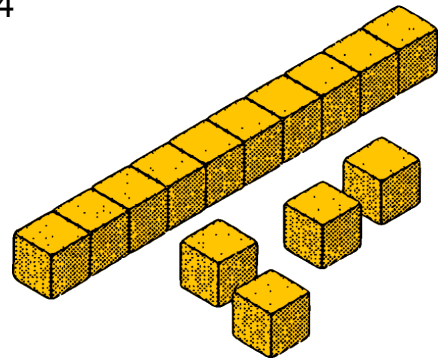
Sčítanie čísel

$$\begin{array}{r} 23 \\ + 14 \\ \hline 37 \end{array}$$


Urob 23



Urob 14



Koľko spolu?



■

Do zošita dokonči nasledujúce výpočty.
Použi desatkocku.

1)
$$\begin{array}{r} 23 \\ + 15 \\ \hline \blacksquare \blacksquare \end{array}$$

2)
$$\begin{array}{r} 12 \\ + 22 \\ \hline \blacksquare \blacksquare \end{array}$$

3)
$$\begin{array}{r} 17 \\ + 41 \\ \hline \blacksquare \blacksquare \end{array}$$

4)
$$\begin{array}{r} 30 \\ + 15 \\ \hline \blacksquare \blacksquare \end{array}$$

5)
$$\begin{array}{r} 71 \\ + 18 \\ \hline \blacksquare \blacksquare \end{array}$$

6)
$$\begin{array}{r} 16 \\ + 61 \\ \hline \blacksquare \blacksquare \end{array}$$

7)
$$\begin{array}{r} 23 \\ + 32 \\ \hline \blacksquare \blacksquare \end{array}$$

8)
$$\begin{array}{r} 112 \\ + 35 \\ \hline \blacksquare \blacksquare \blacksquare \end{array}$$

9)
$$\begin{array}{r} 38 \\ + 100 \\ \hline \blacksquare \blacksquare \blacksquare \end{array}$$

10)
$$\begin{array}{r} 138 \\ + 241 \\ \hline \blacksquare \blacksquare \blacksquare \end{array}$$